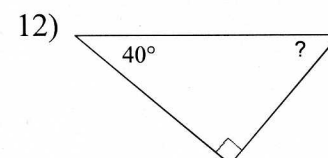
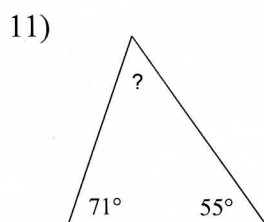
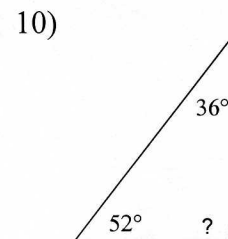
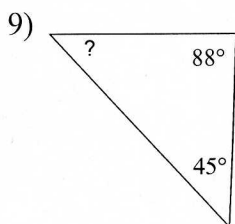
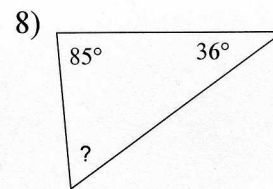
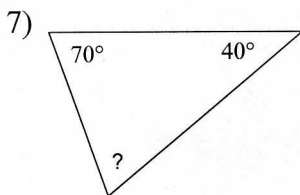
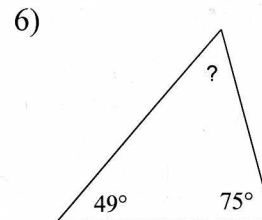
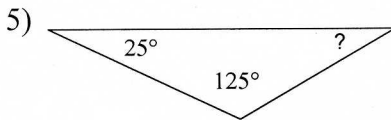
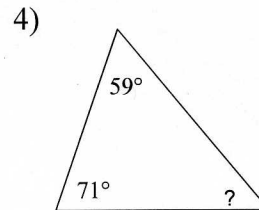
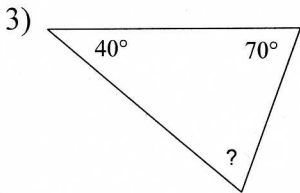
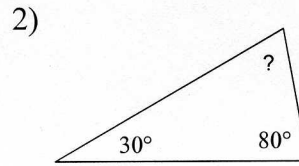
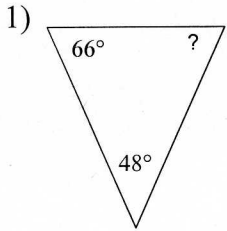
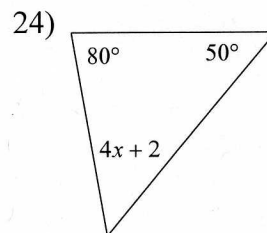
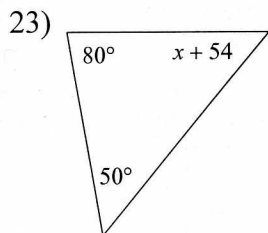
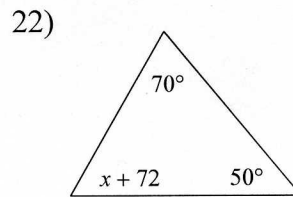
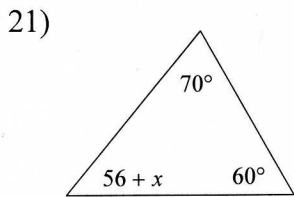
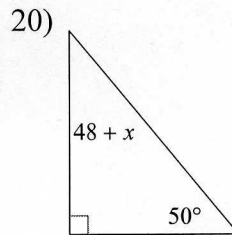
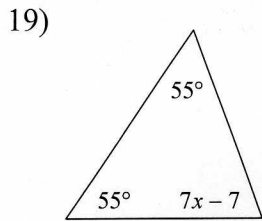
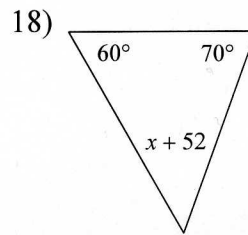
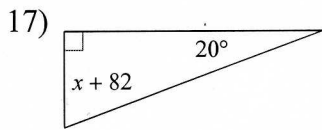
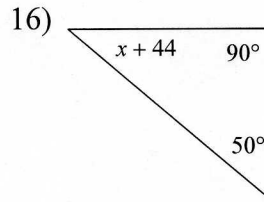
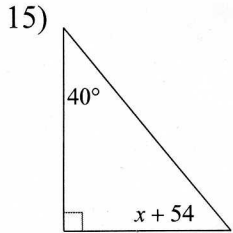
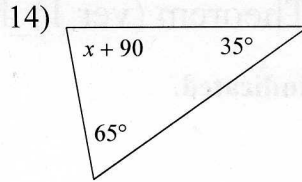
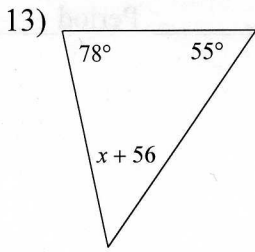


7-2 Triangle Angle-Sum Theorem (ver 1)_hw

Find the measure of each angle indicated.



Solve for x .



Answers to 7-2 Triangle Angle-Sum Theorem (ver 1)_hw

- 4) 50°
- 8) 59°
- 12) 50°
- 16) -4
- 20) -8
- 24) 12

- 3) 70°
- 7) 70°
- 11) 54°
- 15) -4
- 19) 11
- 23) -4

- 2) 70°
- 6) 56°
- 10) 92°
- 14) -10
- 18) -2
- 22) -12

- 1) 66°
- 5) 30°
- 9) 47°
- 13) -9
- 17) -12
- 21) -6